


## How many...?


Visit the African Village in the Drive Through Safari and lookout into the giraffe reserve.

Count how many of each animals you see.

I saw \_\_\_\_\_ giraffes




I saw \_\_\_\_\_ wildebeest



I saw \_\_\_\_\_ zebra



I saw \_\_\_\_\_ ostriches



Giraffes + wildebeest + zebra + ostrich = total number of animals

I saw a total of \_\_\_\_\_ African animals in the African Village reserve at Longleat.

Spend some time looking at the giraffes and then draw one in the space below.



How many legs does the giraffe have?

What shape are a giraffe's ears?

How many spots did you draw on your giraffe?

How many spots do you think a real giraffe has?

Why do you think that?